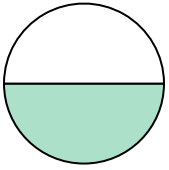




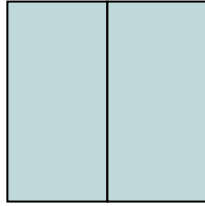
Determine which letter best describes the shaded portion.

1)



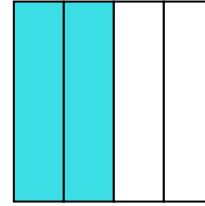
- A. one-half
- B. two-halves
- C. four-quarters

2)



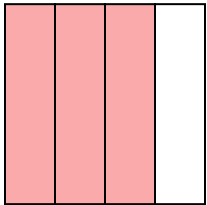
- A. two-halves
- B. one-half
- C. one-fourth

3)



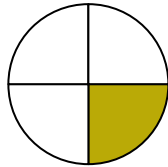
- A. three-quarters
- B. one-quarter
- C. two-quarters

4)




- A. three-fourths
- B. two-quarters
- C. one-quarter

5)



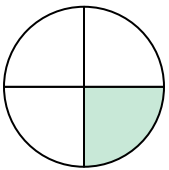
- A. four-fourths
- B. one-fourth
- C. two-quarters

6)



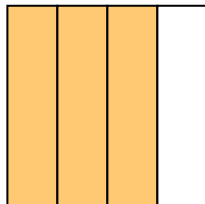
- A. two-halves
- B. four-quarters
- C. two-fourths

7)



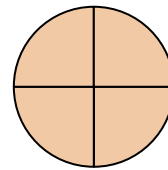
- A. one-fourth
- B. two-halves
- C. two-quarters

8)



- A. one-fourth
- B. three-quarters
- C. two-quarters

9)



- A. two-halves
- B. three-fourths
- C. four-fourths

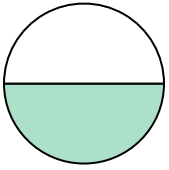
Answers

1. _____
2. _____
3. _____
4. _____
5. _____
6. _____
7. _____
8. _____
9. _____



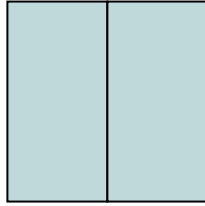
Determine which letter best describes the shaded portion.

1)



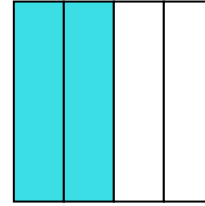
- A. one-half
- B. two-halves
- C. four-quarters

2)



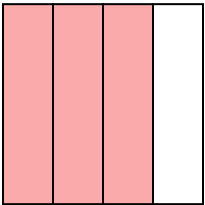
- A. two-halves
- B. one-half
- C. one-fourth

3)



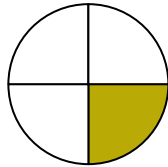
- A. three-quarters
- B. one-quarter
- C. two-quarters

4)




- A. three-fourths
- B. two-quarters
- C. one-quarter

5)



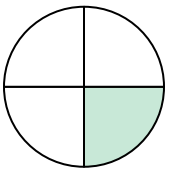
- A. four-fourths
- B. one-fourth
- C. two-quarters

6)



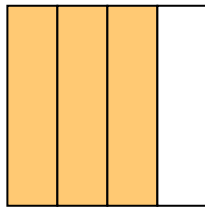
- A. two-halves
- B. four-quarters
- C. two-fourths

7)



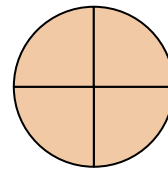
- A. one-fourth
- B. two-halves
- C. two-quarters

8)



- A. one-fourth
- B. three-quarters
- C. two-quarters

9)



- A. two-halves
- B. three-fourths
- C. four-fourths

Answers

1. **A**

2. **A**

3. **C**

4. **A**

5. **B**

6. **A**

7. **A**

8. **B**

9. **C**